

College Admission PSAT-10

PSAT 10 Certification Exam (Preliminary SAT Test)

For More Information – Visit link below:

<https://www.examsempire.com/>

Product Version

1. Up to Date products, reliable and verified.
2. Questions and Answers in PDF Format.



<https://examsempire.com/>

Visit us at: <https://www.examsempire.com/psat-10>

Latest Version: 6.1

Question: 1

If $3a + 5b = 98$ and $a = 11$, what is the value of $a + b$?

A. See the solution below with Step by Step Explanation.

Answer: A

Explanation:

First solve for b . If $3a + 5b = 98$ and $a = 11$:

$$\begin{aligned}3(11) + 5b &= 98 \\33 + 5b &= 98 \\5b &= 65 \\b &= 13\end{aligned}$$

Therefore, $a + b = 11 + 13 = 24$

Question: 2

A taxi ride costs \$4.25 for the first mile and \$0.70 for each mile after the first. Which of the following functions $c(d)$ gives the total cost (in dollars) of traveling d miles ($d \geq 1$)?

- A. $c(d) = 3.55 + 0.70(d + 1)$
- B. $c(d) = 3.55 + 0.70(d - 1)$
- C. $c(d) = 4.25 + 0.70d$
- D. $c(d) = 4.25 + 0.70(d - 1)$

Answer: D

Explanation:

The function for the cost of a taxi ride is a combination of a constant function for the first mile and a linear function for the rest of the ride. The constant function is $c_1(d) = 4.25$ since the cost of the first mile is \$4.25. For the linear part, subtract 1 from d to exclude the first mile, and then multiply the result by 0.70 since it costs \$0.70 per mile. The result is $c_2(d) = 0.70(d - 1)$. Finally, write the function for the total cost of the taxi ride by adding the two functions.

$$c(d) = 4.25 + 0.70(d - 1)$$

Question: 3

A jeweler sells a certain type of necklace for \$50. She estimates that she can sell 200 necklaces for this price and that she will sell 10 fewer necklaces for every dollar the price is raised and 10 more necklaces

for every dollar the price is lowered. Write a function $r(x)$ for the estimated revenue if she raises the price by x dollars.

- A. $r(x) = -10x^2 - 300x + 10,000$
- B. $r(x) = 10x^2 + 300x + 10,000$
- C. $r(x) = -10x^2 + 300x + 10,000$
- D. $r(x) = 10x^2 - 300x + 10,000$

Answer: A

Explanation:

Revenue is the total amount of money the jeweler makes from necklace sales. In this case, the revenue is the price of each necklace multiplied by the total number of necklaces sold. So, to find the estimated revenue, find the price and the number of necklaces sold after the price is raised by x dollars. Then multiply the two quantities together. If the price of a necklace starts at \$50, then the price after it is raised by x dollars will be $50 + x$ dollars. In addition, we are told that the jeweler sells 10 fewer necklaces for every dollar the price is raised. Therefore, the total number of necklaces that are sold will be $200 - 10x$. Calculate the revenue function $r(x)$ by multiplying the expressions and simplify the result:

$$\begin{aligned} r(x) &= (50 + x)(200 - 10x) \\ &= 10,000 - 500x + 200x - 10x^2 \\ &= -10x^2 - 300x + 10,000 \end{aligned}$$

Therefore, the function that estimates the revenue if she raises the price by x dollars is $r(x) = -10x^2 - 300x + 10,000$.

Question: 4

Simplify the expression $\frac{x^2+2x-24}{5x-20}$.

- A. $\frac{x-4}{5}$
- B. $\frac{x+6}{5}$
- C. $\frac{(x-4)(x+6)}{5(x-4)}$
- D. $\frac{5(x-4)}{(x+4)(x+6)}$

Answer: B

Explanation:

To simplify the expression, first factor the numerator and the denominator. To factor the numerator, use trial-and-error to find two numbers whose sum is 2 and whose product is -24, and then put those numbers into the form $(x + _)(x + _)$. For the denominator, factor out the common factor, which is 5.

$$\frac{x^2 + 2x - 24}{5x - 20} = \frac{(x + 6)(x - 4)}{5(x - 4)}$$

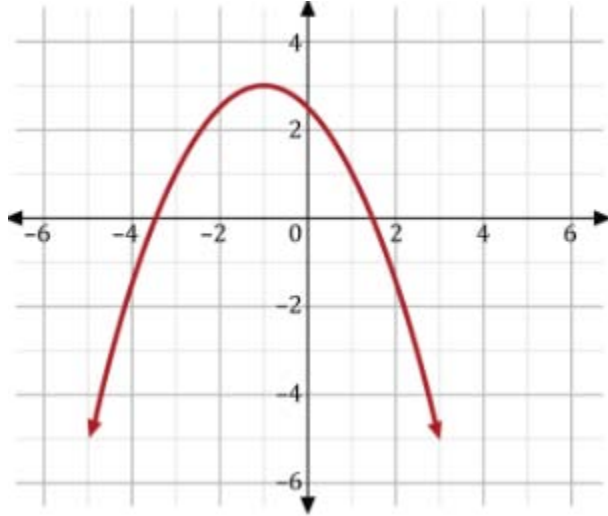
Now there is a common factor, $(x - 4)$, in both the numerator and the denominator. Therefore, you can further simplify the expression by cancelling it out.

$$\frac{(x + 6)(x - 4)}{5(x - 4)} = \frac{x + 6}{5}$$

Therefore, the simplified form of the expression is $\frac{x+6}{5}$.

Question: 5

Which of these is the equation graphed below?



- A. $y = -2x^2 - 4x + 1$
- B. $y = -x^2 - 2x + 5$
- C. $y = -x^2 - 2x + 2$
- D. $y = -\frac{1}{2}x^2 - x + \frac{5}{2}$

Answer: D

Explanation:

The vertex form of a quadratic equation is $y = a(x - h)^2 + k$, where $x = h$ is the parabola's axis of symmetry and (h, k) is the parabola's vertex. The vertex of the graph is $(-1, 3)$, so the equation can be written as $y = a(x + 1)^2 + 3$. The parabola passes through point $(1, 1)$. Substitute $x = 1$ and $y = 1$ into the equation. So, $1 = a(1 + 1)^2 + 3$. Solve for a .

$$1 = a(1 + 1)^2 + 3$$

$$1 = a(2)^2 + 3$$

$$1 = 4a + 3$$

$$-2 = 4a$$

$$-\frac{1}{2} = a$$

The vertex form of the parabola is $y = -\frac{1}{2}(x + 1)^2 + 3$. Write the equation in standard form, $y = ax^2 + bx + c$.

$$y = -\frac{1}{2}(x + 1)^2 + 3$$

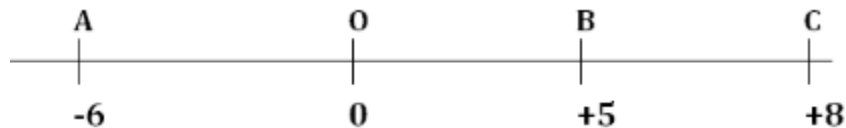
$$y = -\frac{1}{2}(x^2 + 2x + 1) + 3$$

$$y = -\frac{1}{2}x^2 - x - \frac{1}{2} + 3$$

$$y = -\frac{1}{2}x^2 - x + \frac{5}{2}$$

Question: 6

In the figure, A, B, and C are points on the number line, and O is the origin. What is the ratio of the distance BC to distance AB?



- A. 3 : 5
- B. 8 : 5
- C. 8 : 11
- D. 3 : 11

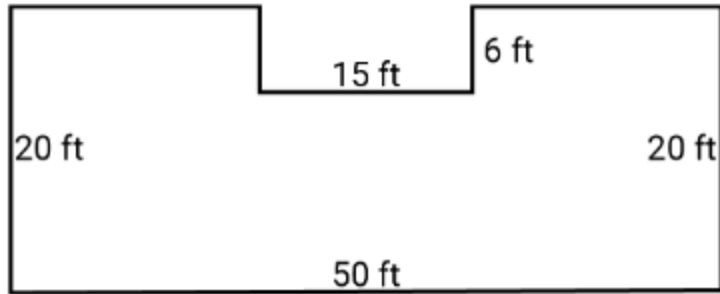
Answer: D

Explanation:

The figure is a number line. So, the distance from point A to point B will be the difference of $B - A$. This is $5 - (-6) = 5 + 6 = 11$. Also, the distance from point B to point C will be the difference of $C - B$, which is $8 - 5 = 3$. So, the ratio $BC : AB$ will be 3 : 11.

Question: 7

What is the area of the figure shown above? Give your answer in square feet.



A. See the solution below with Step by Step Explanation.

Answer: A

Explanation:

One way to determine the answer is by computing the area of the large rectangle as well as the area of the rectangular cutout. Then, the area of the cutout is subtracted from that of the larger rectangle. The area of the rectangle is the product of its length and width, $A_{\text{rect}} = 20 \text{ ft} \times 50 \text{ ft} = 1,000 \text{ ft}^2$. Since the cutout is rectangular as well, its area is computed in the same way: $A_{\text{cutout}} = 6 \text{ ft} \times 15 \text{ ft} = 90 \text{ ft}^2$. Then subtract the two areas: $1,000 \text{ ft}^2 - 90 \text{ ft}^2 = 910 \text{ ft}^2$.

Question: 8

How many identical cubes, each with edges of 3 inches, can fit in a box measuring 15 inches by 9 inches by 6 inches?

A. See the solution below with Step by Step Explanation.

Answer: A

Explanation:

The answer is found by dividing the volume of the box by the volume of the cube:

$$\frac{V_{\text{box}}}{V_{\text{cube}}} = \frac{(15 \text{ in}) \times (9 \text{ in}) \times (6 \text{ in})}{(3 \text{ in}) \times (3 \text{ in}) \times (3 \text{ in})} = \frac{810 \text{ in}^3}{27 \text{ in}^3} = 30$$

Question: 9

Simplify the expression $x^3 \cdot (16x)^{\frac{1}{2}}$.

- A. $8x^{\frac{7}{2}}$
- B. $4x^{\frac{7}{2}}$
- C. $8x^{\frac{3}{2}}$
- D. $4x^{\frac{3}{2}}$

Answer: B

Explanation:

To simplify the expression, first simplify the expression with parentheses. To raise $16x$ to the $\frac{1}{2}$ power, raise both 16 and x to the $\frac{1}{2}$ power separately.

$$x^3 \cdot (16x)^{\frac{1}{2}} = x^3 \cdot 16^{\frac{1}{2}} \cdot x^{\frac{1}{2}}$$

To raise something to the $\frac{1}{2}$ power is the same as taking the square root, so $16^{\frac{1}{2}} = 4$. We then combine like terms by adding exponents:

$$x^3 x^{\frac{1}{2}} = x^{\frac{6}{2}} x^{\frac{1}{2}} = x^{\frac{7}{2}}$$

Finally, we rewrite the equation as $4x^{\frac{7}{2}}$.

Question: 10

Five less than three times a number is equal to 58. What is the number?

A. See the solution below with Step by Step Explanation.

Answer: A

Explanation:

The sentence in the question is translates to $3x - 5 = 58$. This can be solved for x using normal algebra methods. Start by adding 5 to both sides of the equation.

$$3x = 63$$

Then, divide both sides by 3.

$$x = 21$$

Thank You for Trying Our Product
Special 16 USD Discount Coupon: NSZUBG3X

Email: support@examsempire.com

**Check our Customer Testimonials and ratings
available on every product page.**

Visit our website.

<https://examsempire.com/>