

Career

WPT-R

Wonderlic Personnel Test-Revised Certification Exam

For More Information – Visit link below:

<https://www.examsempire.com/>

Product Version

- 1. Up to Date products, reliable and verified.**
- 2. Questions and Answers in PDF Format.**



<https://examsempire.com/>

Latest Version: 6.0

Question: 1

Which word does not fit in the following list?

- A. revive
- B. resume
- C. revert
- D. renew

Answer: C

Explanation:

Revive, resume, and renew all use the "re-" prefix in the sense of repeating or doing something again. To "revive" is to bring to life again or to become alive again, to "resume" is to assume again or take up again, and to "renew" is to make new again. To "revert," however, uses the re- prefix in the sense of backward movement; i.e., going back to a previous state.

Question: 2

Look at the row of numbers below. Which number is the smallest?

- A. $\frac{1}{3}$
- B. 3
- C. 0.3
- D. $\frac{3}{100}$
- E. 0.003

Answer: E

Explanation:

To find the answer, reformat all numbers so they can be more easily compared. Since the list contains two fractions, change them to decimals, and extend all numbers to three decimal places. Reformatting our list, we get

0.333 3.000 0.300 0.030 0.003

Now it is easy to see that 0.003 is the smallest number in the list.

Question: 3

Assume the first two statements are true.

1. Joe and Sally know one another
2. Sally and Ian know one another

3. Joe and Ian know one another
The third statement is:

- A. True
- B. False
- C. Not certain

Answer: C

Explanation:

Joe and Sally know one another, and Sally knows Ian, but it does not follow that Joe and Ian must know one another. They may, or they may not, but their relationship with Sally does not determine whether they know one another or not.

Question: 4

Two people leave a city at the same time. One person travels at 30 miles an hour and arrives three hours later at his destination. The second person travels to a city 120 miles away and arrives at the same time. How fast is the second person traveling?

- A. 30 miles an hour
- B. 40 miles an hour
- C. 50 miles an hour
- D. 60 miles an hour

Answer: B

Explanation:

If the second person takes three hours to drive to a city 120 miles away, dividing 120 by 3 gets us 40 miles per hour.

Question: 5

The officer cited the man for reckless driving, saying that he had failed to heed the signs about dangerous weather conditions.

In this context, heed most nearly means:

- A. Obey
- B. Ignore
- C. See

Answer: A

Explanation:

While it is possible that the man could fail to see the sign about dangerous weather

conditions, the fact that the judge cites him for reckless driving suggests that he did see the sign but chose not to follow it.

Question: 6

Which of the following words contains the greatest number of different letters?

- A. Abracadabra
- B. Onomatopoeia
- C. Disillusionment

Answer: C

Explanation:

"abracadabra" contains five unique letters, "onomatopoeia" contains eight, and "disillusionment" contains ten.

Question: 7

A man is 1.5 times as old as his sister. He is now 30 years old. How old was he when she was born?

- A. 5
- B. 10
- C. 15
- D. 20

Answer: B

Explanation:

This question is solved in two steps. First, we figure out how old the man's sister is. If he is 30, and he is 1.5 times as old as she is now, dividing 30 by 1.5 gets us 20. If she is 20 and he is 30, when she was born (i.e., when she was 0 years old), he was 10, which we get by subtracting her current age from his current age.

Question: 8

Which word does not fit in the following list?

- A. inspire
- B. outrage provoke
- C. regret





Answer: C

Explanation:

All three other verbs can refer to creating an effect on someone else, whereas regret is an internal emotion.

Question: 9

Which of the following figures is most different from the others?

- a. 
- b. 
- c. 
- d. 

- A. Option A
B. Option B
C. Option C
D. Option D

Answer: C

Explanation:

In the other three figures, all sides are the same length, but in figure C, the bottom side is shorter than the other two sides. Other things to consider might be the number of sides in each figure, but since two figures have three sides, we can dismiss that idea.

Question: 10

Plants are sold for \$6 each. If a customer buys more than ten plants, the price drops to \$5 for each plant after the tenth. How much will a customer pay for 15 plants?

- A. \$75
B. \$85
C. \$90
D. \$100

Answer: B

Explanation:

First figure out what buying 10 plants will cost the customer. At \$6 each, 10 plants will

cost \$60, because $10 \times 6 = 60$. Subtract 10 from 15 to see how many plants they are buying at the lower rate, and we get 5. If the lower rate is \$5, and the customer buys 5, they spend an additional \$25. $\$25 + \$60 = \$85$.

Thank You for Trying Our Product

Special 16 USD Discount Coupon: **NSZUBG3X**

Email: support@examsempire.com

**Check our Customer Testimonials and ratings
available on every product page.**

Visit our website.

<https://examsempire.com/>